


Name: _____




I CAN READ CVC WORDS

Directions: Read each word. Match the picture to the word.


rib




net



hop




dad




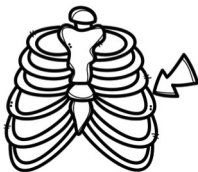
ten



bug



COPYRIGHT © 2017 WHITNEY SOLOWSKI OF GINGER AND GUM K-2




Name: _____




I CAN READ CVC WORDS

Directions: Read each word. Match the picture to the word.


pod




pen



mat




lid



mud



tub



COPYRIGHT © 2017 WHITNEY SOLOWSKI OF GINGER AND GUM K-2



Name: _____



I CAN READ CVC WORDS

Directions: Read each word. Match the picture to the word.

cub


ham

hat

fog

den

bib




Name: _____




I CAN READ CVC WORDS

Directions: Read each word. Match the picture to the word.


jug




cat



kid




hen




log



sub



COPYRIGHT © 2017 WHITNEY SOLOWSKI OF GINGER AND GUM K-2




Name: _____




I CAN READ CVC WORDS

Directions: Read each word. Match the picture to the word.


jet




rod



dig




bat




hem



hug



COPYRIGHT © 2017 WHITNEY SOLOWSKI OF GINGER AND GUESS K-2



Name: _____





CHARACTER AND SETTING

Directions: Cut out the pictures. Sort the characters and settings.



Character

Setting



Name: _____

I CAN ADD BY DRAWING A PICTURE

Add each problem. Draw a picture to help you.

$2+3=$ _____

$0+6=$ _____

$5+2=$ _____

$1+9=$ _____

$4+6=$ _____

$2+2=$ _____

Name: _____

I CAN ADD BY DRAWING A PICTURE

Add each problem. Draw a picture to help you.

$3+5=$ _____

$2+1=$ _____

$1+1=$ _____

$4+2=$ _____

$7+2=$ _____

$6+0=$ _____

Name: _____

I CAN ADD STORY PROBLEMS

Read or listen to each story problem. Write the number sentence for each. Draw a picture to help you solve each one.

1. Jim plants 5 roses in the garden. Pat plants 5 tulips in the garden. How many flowers are in the garden?

$$\underline{\hspace{2cm}} + \underline{\hspace{2cm}} = \underline{\hspace{2cm}}$$

2. There are 7 frogs in the pond. Then 2 more frogs jump in. How many frogs are in in the pond?

$$\underline{\hspace{2cm}} + \underline{\hspace{2cm}} = \underline{\hspace{2cm}}$$

3. Deb has 5 pennies in her left pocket. She has 2 more pennies in her right pocket. How many pennies does she have?

$$\underline{\hspace{2cm}} + \underline{\hspace{2cm}} = \underline{\hspace{2cm}}$$

Name: _____

I CAN ADD STORY PROBLEMS

Read or listen to each story problem. Write the number sentence for each. Draw a picture to help you solve each one.

1. There are 6 puppies at the pet shop. There are 2 kittens at the pet shop. How many animals are at the pet shop?

$$\underline{\hspace{2cm}} + \underline{\hspace{2cm}} = \underline{\hspace{2cm}}$$

2. Meg sees 4 red balls at the playground. She sees 4 more green balls. How many balls are at the playground?

$$\underline{\hspace{2cm}} + \underline{\hspace{2cm}} = \underline{\hspace{2cm}}$$

3. The rabbit eats 3 carrots. He is still hungry so he eats 2 more! How many carrots did the rabbit eat?

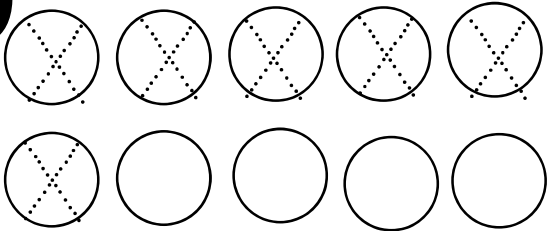
$$\underline{\hspace{2cm}} + \underline{\hspace{2cm}} = \underline{\hspace{2cm}}$$

Name: _____

SUBTRACTION

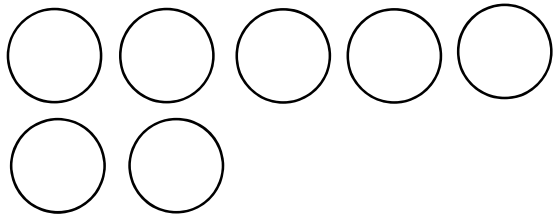
Cross out the circles to solve the subtraction problems. Number one has been done for you.

1



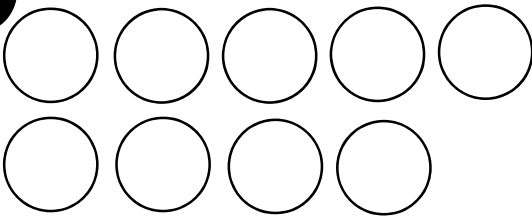
$$10 - 6 = \underline{4}$$

2




$$7 - 2 = \underline{\quad}$$

3



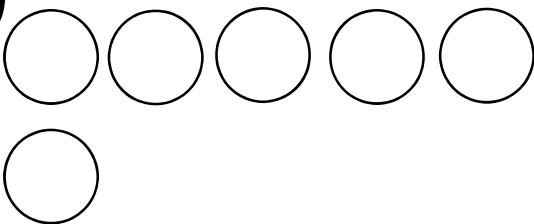
$$9 - 5 = \underline{\quad}$$

4



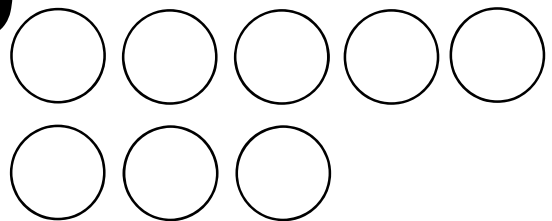
$$5 - 5 = \underline{\quad}$$

5



$$6 - 0 = \underline{\quad}$$

6



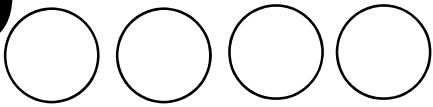
$$8 - 7 = \underline{\quad}$$

Name: _____

SUBTRACTION

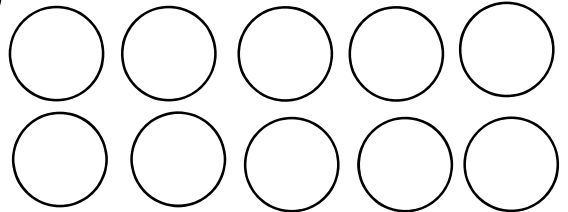
Cross out the circles to solve the subtraction problems.

1



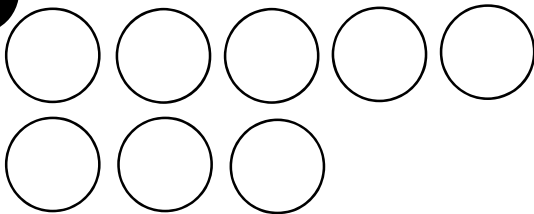
$$4 - 2 = \underline{\quad}$$

2



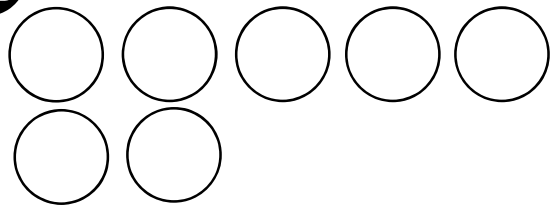
$$10 - 3 = \underline{\quad}$$

3



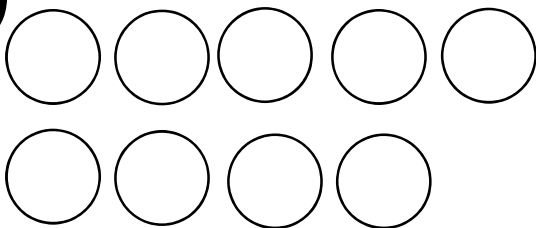
$$8 - 1 = \underline{\quad}$$

4



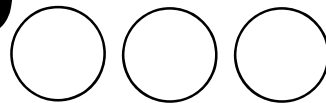
$$7 - 5 = \underline{\quad}$$

5



$$9 - 4 = \underline{\quad}$$

6



$$3 - 3 = \underline{\quad}$$

Name: _____

I CAN SUBTRACT: STORY PROBLEMS

Read or listen to each story problem. Write the number sentence for each. Draw a picture to help you solve each one.

1. Kim bakes 10 cookies. She eats 3 cookies. How many cookies are left?

$$\underline{\hspace{2cm}} - \underline{\hspace{2cm}} = \underline{\hspace{2cm}}$$

2. Tom has 7 toy cars. He gives 1 toy car to his brother. How many toy cars does he have now?

$$\underline{\hspace{2cm}} - \underline{\hspace{2cm}} = \underline{\hspace{2cm}}$$

3. There were 8 ducks in the pond. Then 4 ducks flew away. How many ducks are left in the pond?

$$\underline{\hspace{2cm}} - \underline{\hspace{2cm}} = \underline{\hspace{2cm}}$$

Name: _____

I CAN SUBTRACT: STORY PROBLEMS

Read or listen to each story problem. Write the number sentence for each. Draw a picture to help you solve each one.

1. Wes has 6 pennies. He spends 2 pennies. How many pennies does he have left?

$$\underline{\hspace{2cm}} - \underline{\hspace{2cm}} = \underline{\hspace{2cm}}$$

2. The rabbit has 5 carrots. He eats 5 carrots. How many carrots does he have left?


$$\underline{\hspace{2cm}} - \underline{\hspace{2cm}} = \underline{\hspace{2cm}}$$

3. There are 9 flowers in Liz's garden. She picks 4 flowers. How many flowers are left in the garden?



$$\underline{\hspace{2cm}} - \underline{\hspace{2cm}} = \underline{\hspace{2cm}}$$

Name: _____



The Beach




Directions: Fill in the missing sounds for each word.




ell





ellyfish




ave



fi




s



n

Name: _____



The Beach WRITING

Directions: Draw and write about what you can see at the beach. Don't forget to include color words!

Four sets of handwriting lines, each consisting of a solid top line, a dashed middle line, and a solid bottom line.